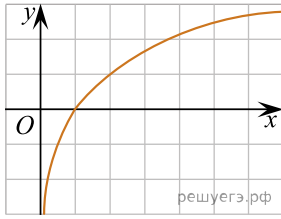
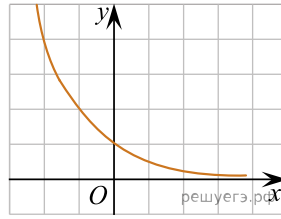


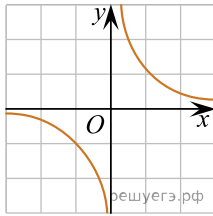
Из приведенных графиков выберите график функции  $y = a^x$ , где  $a > 1$ :



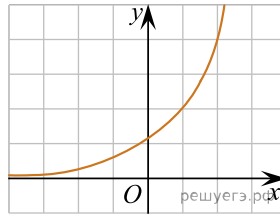
а)



б)



в)



г)