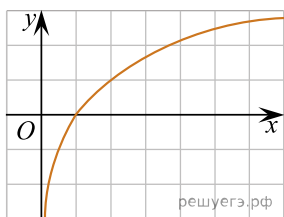
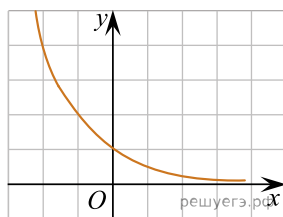


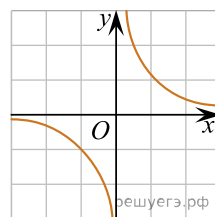
Из приведенных графиков выберите график функции $y = a^x$, где $a > 1$:



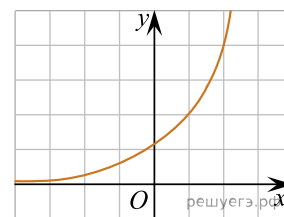
а)



б)



в)



г)